


Clouds

Clouds are made of tiny drops of water and ice that are so small they float in the air.

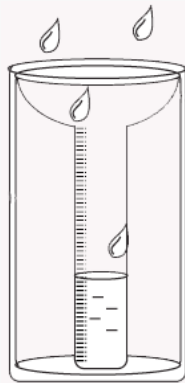
What does the sky look like now?



Rain

Turn on the shower or 'rainmaker' for 5 seconds. Then measure how much rain fell into the rain gauge.

_____ mm



This is _____'S
name


weather report

for

_____/_____/_____
day month year

Before you go to
Sydney Observatory
stick a picture
of yourself
here

Temperature



What is the
temperature
today?

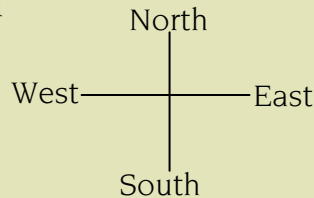
_____ °C

Would you like to go to the beach today?
Yes or No


Would you like to wear a beanie today?
Yes or No

Is today hot or cold? _____

Wind



The wind is blowing from the direction of



and it's speed is _____ kilometres per hour.

Can you see something on the building that shows where the wind is coming from?

Do the flags agree with this? Yes or No



Sunlight

UV meters measure how strong the sunlight is.

If the reading is 6 or greater you need to Slip! Slop! Slap! and if 11 or over avoid the sun.

What is the UV index today?



UV 1,2 Low UV 3,4,5 Medium UV 6,7 High UV 8,9,10 Very High UV 11+ Extreme

What is the temperature today?

Colour the middle part of the thermometer red to match today's temperature.

